

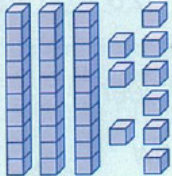


# MONDAY

- Which number is closest to 40?  
33   29   36   31
- Sort into 2 groups. Colour the hard objects red and the soft objects blue.  

- $4 + 6 = \square$
- $10 - 4 = \square$
- $\square$  o'clock  
or  $\square : 00$  
- $18 = 10 + 8$ , so

$23 = \square + \square$





- Shade the smallest number.  
**(20) (30) (18) (51) (24) (22)**
- Shade the 2 numbers that total 10.  
**(4) (5) (3) (2) (6)**

-  How many more to total 40?  
 $\square$

- Shade half of this battery.






# TUESDAY

- $\square$  o'clock  
or  $\square : 00$  
- Sort into 2 groups. Colour those you can eat blue and those you can't red.  

- Tick the heavier box.  

-  How many more to total 30?  
 $\square$

Hundreds	Tens	Ones
1	3	5

$135 = 100 + \square + \square$





- Shade the new position.  
From , go down 2 spots, to the right 2 spots, up 1 spot, left 1 spot.  


- Colour the penguin on the right.  

- Colour coins to make 35c.  
**(10c) (5c) (10c) (5c) (10c) (5c)**

- Write forty.  $\square$
- Which number is closest to 40?  
 $\square$    30   42   37



# WEDNESDAY

- Shade the largest number.  
**(18) (21) (14) (29) (30)**
- $21 = 20 + 1$   
 $33 = \square + \square$
- $5 + 6 = \square$
- $10 - 3 = \square$
- 500,  $\square$ , 300, 200
- The  holds more than a . The  holds more than the . Order.



- Shade the 2 numbers that total 10.  
**(8) (3) (6) (2) (1)**
- Circle 8, count back 5.  
0 1 2 3 4 5 6 7 8 9 10 11  
Write the number sentence.  
 $\square - \square = \square$

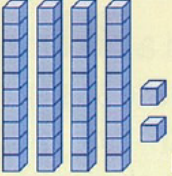
- Flip and draw.





- 100, 80, 60,  $\square$ , 20



### THURSDAY

1.  How many more to total 50?

2. Is this dot more than halfway?  
  
 yes  no

3.  o'clock  
 or  :00 

4. Write *fifty-two*.

5.  $6 + 5 =$

6.  $12 = 10 + 2$ , so


$23 =$    $+$

7. Shade the 2 numbers that total 10.

3  6  2  7  5

8. Which number is closest to 50?

40  54  45  44

9. Toto the dog buried 3 bones in one spot and 6 bones in another. 

How many bones did he bury? Write the number sentence.

$+$    $=$


10.  $10 - 1 =$

11. Is 90 before or after 91?

12. 40, 38, 36, , 32

13.  $10 + 10 =$

14. Estimate how many rulers go around your desk.  
 Check it.

15. The abacus number is . 

MY SCORE

### FRIDAY

1.  $14 = 10 + 4$ , so

$24 =$    $+$

2. Is this dot about halfway or a quarter way?

  
 half  quarter


3. How many days are in a week?

4.  o'clock  
 or  :00 

5. Shade the 2 numbers that total 10.

1  8  6  3  5  9

6.  How many more to total 30?

7. How many groups of 2?  


8. 5, 10, 15, 20, 25,

9.  $10 - 9 =$

10. Which number is closest to 90?

80  85  93  86

11. 1, 3, 5, 7, 9,





12. 

Hundreds	Tens	Ones
1	4	9

$149 =$    $+$    $+$

13. Write in each shape the number of sides.



14. The  holds less than the . The  holds less than the . Order.



15.

MY SCORE